

DIRECTIONS

*Answers without work to check. If you cannot find your mistake then please seek help EARLY!
This assignment is worth 4 pts. 1) did you complete it 2) did you show all the work 3) did you
correct in pen 4) did you get 75% of the problems correct?*

Chapter 5 Test Review pg. 282 - 284 answers without work. Check the ones you were supposed to do for your assignment. If you do not get the correct answer, try to find your mistake. If you cannot find your mistake, ask a friend or your teacher for help to better understand the concept for that problem.

1. $(2, -5)$

2. $(1, -1)$

3. $(4, -1)$

4. $(-2, -3)$

5. $(2, 1)$

6. $(2, 0)$

7. 8 brushes, 4 tubes of paint

8. $(2, -8)$

9. $(-2, 5)$

10. $(4, 5)$

11. no solution

12. no solution

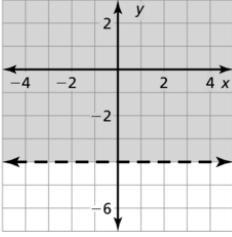
13. infinitely many solutions

14. $x = -3$

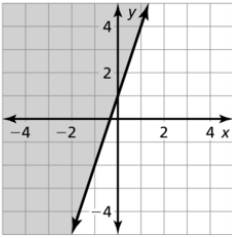
15. $x = -5$

16. $x = 13, x = 1$

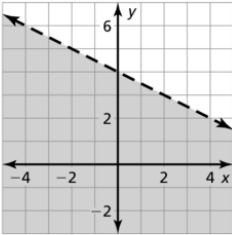
17.



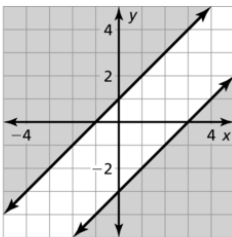
18.



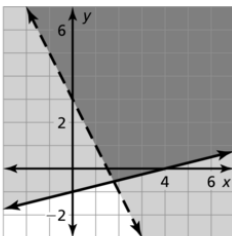
19.



20.



21.



22.

